


 **2018 Primary 2 - Term 2 (SA1) Math (Rosyth)**  Duplicate Print Delete Assign Test**Test Introduction**[+ Add Introduction](#)**20 Questions** (40 Points)Question Bank: 19,408 Questions 

Test Questions

2 Test Assignments

**Question 1**

Primary 2 Math » Primary 2 Math (Term 2)

2 pts

**SECTION A** (6 x 2 marks)

There are 6 questions in this section.  
Read the questions carefully.  
Choose the correct answer.

9 twos = \_\_\_\_\_

- A) 9  
B) 7  
C) 11  
 D) 18

**Question Type:** Multiple Choice  
**Randomize Answers:** No  
**Date Added:** Tue 15th Jan 2019  
**Last Modified:** N/A  
**QID#:** 15,957,647

[Answers](#) | [Edit](#) | [Duplicate](#) | [Used In](#) | [Reorder](#)[Remove From Test](#)**Question 2**

Primary 2 Math » Primary 2 Math (Term 2)

2 pts

30 apples are packed equally into 5 bags.  
There are \_\_\_\_ apples in each bag.

- A) 6  
B) 7  
C) 8

D) 9

---

**Question Type:** Multiple Choice  
**Randomize Answers:** No  
**Date Added:** Tue 15th Jan 2019  
**Last Modified:** N/A  
**QID#:** 15,957,657

[Answers](#) | [Edit](#) | [Duplicate](#) | [Used In](#) | [Reorder](#)

[Remove From Test](#)

### Question 3

Primary 2 Math » Primary 2 Math (Term 2)

2 pts

The height of the classroom door is about \_\_\_\_\_.

- A) 2 cm  
✓ B) 2 m  
C) 20 cm  
D) 20 m

---

**Question Type:** Multiple Choice  
**Randomize Answers:** No  
**Date Added:** Tue 15th Jan 2019  
**Last Modified:** N/A  
**QID#:** 15,957,669

[Answers](#) | [Edit](#) | [Duplicate](#) | [Used In](#) | [Reorder](#)

[Remove From Test](#)

### Question 4

Primary 2 Math » Primary 2 Math (Term 2)

2 pts

$758 + 215 =$  \_\_\_\_\_

- A) 543  
B) 563  
C) 943  
✓ D) 973

---

**Question Type:** Multiple Choice  
**Randomize Answers:** No  
**Date Added:** Tue 15th Jan 2019  
**Last Modified:** N/A  
**QID#:** 15,957,675

[Answers](#) | [Edit](#) | [Duplicate](#) | [Used In](#) | [Reorder](#)

[Remove From Test](#)

### Question 5

Primary 2 Math » Primary 2 Math (Term 2)

2 pts

7 groups of 4 = \_\_\_\_\_ x 4

- A) 4

- ✓ B) 7  
C) 11  
D) 28

**Question Type:** Multiple Choice  
**Randomize Answers:** No  
**Date Added:** Tue 15th Jan 2019  
**Last Modified:** N/A  
**QID#:** 15,957,680

[Answers](#) | 
 [Edit](#) | 
 [Duplicate](#) | 
 [Used In](#) | 
 [Reorder](#)

[Remove From Test](#)

## Question 6

Primary 2 Math » Primary 2 Math (Term 2)

2 pts

A plate of chicken rice costs \_\_\_\_\_.



- A) \$ 2.30  
B) \$ 2.32  
C) \$ 4.20  
✓ D) \$ 4.30

**Question Type:** Multiple Choice  
**Randomize Answers:** No  
**Date Added:** Tue 15th Jan 2019  
**Last Modified:** N/A  
**QID#:** 15,957,691

[Answers](#) | 
 [Edit](#) | 
 [Duplicate](#) | 
 [Used In](#) | 
 [Reorder](#)

[Remove From Test](#)


## Question 7

Primary 2 Math » Primary 2 Math (Term 2)

2 pts

### SECTION B (8 x 2 marks)

There are 8 questions in this section.  
Read the questions carefully.



There are \_\_\_\_\_ groups of \_\_\_\_\_

- A) 5 groups of 3
- B) 2 groups of 3
- C) 3 groups of 4
- ✓ D) 3 groups of 5

**Question Type:** Multiple Choice  
**Randomize Answers:** No  
**Date Added:** Tue 15th Jan 2019  
**Last Modified:** N/A  
**QID#:** 15,957,714

[Answers](#) | 
 [Edit](#) | 
 [Duplicate](#) | 
 [Used In](#) | 
 [Reorder](#)

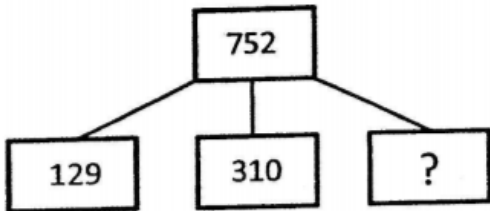
[Remove From Test](#)

## Question 8

Primary 2 Math » Primary 2 Math (Term 2)

2 pts

Alice adds 3 numbers together to get 752.  
 Two of the numbers are 129 and 310.  
 What is the third number?



**Accepted answers:**

- ✓ 313

**Question Type:** Free Text  
**Date Added:** Wed 16th Jan 2019  
**Last Modified:** N/A  
**QID#:** 15,964,795

[Answers](#) | 
 [Edit](#) | 
 [Duplicate](#) | 
 [Used In](#) | 
 [Reorder](#)


[Remove From Test](#)

## Question 9

Primary 2 Math » Primary 2 Math (Term 2)

2 pts

Choose the most expensive item.



- A) A

B) B

✓ C) C

**Question Type:** Multiple Choice  
**Randomize Answers:** No  
**Date Added:** Wed 16th Jan 2019  
**Last Modified:** N/A  
**QID#:** 15,964,855

[Answers](#) | [Edit](#) | [Duplicate](#) | [Used In](#) | [Reorder](#)

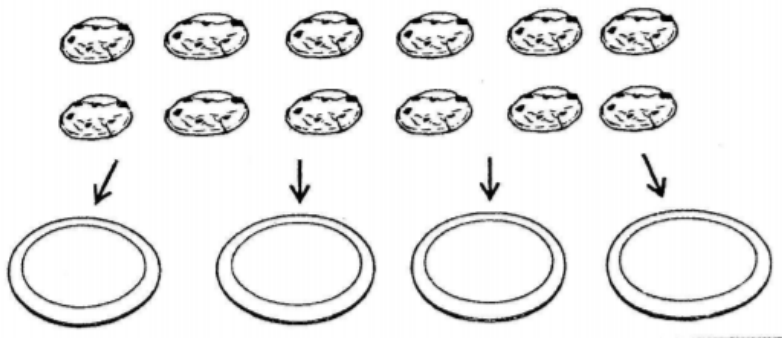
[Remove From Test](#)

## Question 10

Primary 2 Math » Primary 2 Math (Term 2)

2 pts

12 cookies are placed onto 4 equal plates.  
How many cookies are there on each plate?



**Accepted answers:**

✓ 3

**Question Type:** Free Text  
**Date Added:** Wed 16th Jan 2019  
**Last Modified:** N/A  
**QID#:** 15,964,866

[Answers](#) | [Edit](#) | [Duplicate](#) | [Used In](#) | [Reorder](#)


[Remove From Test](#)

## Question 11

Primary 2 Math » Primary 2 Math (Term 2)

2 pts

Study the graph carefully.



Siti sold \_\_\_\_\_ books in a month.

Accepted answers:

✓ 15

Question Type: Free Text  
 Date Added: Wed 16th Jan 2019  
 Last Modified: N/A  
 QID#: 15,964,880

[Answers](#) | [Edit](#) | [Duplicate](#) | [Used In](#) | [Reorder](#)


[Remove From Test](#)

## Question 12

Primary 2 Math » Primary 2 Math (Term 2)

2 pts

Study the graph carefully.



Brian sold \_\_\_\_\_ more books than Li Yan.

Accepted answers:

✓ 20

Question Type: Free Text  
 Date Added: Wed 16th Jan 2019  
 Last Modified: N/A  
 QID#: 15,964,895

[Answers](#) | 
 [Edit](#) | 
 [Duplicate](#) | 
 [Used In](#) | 
 [Reorder](#)

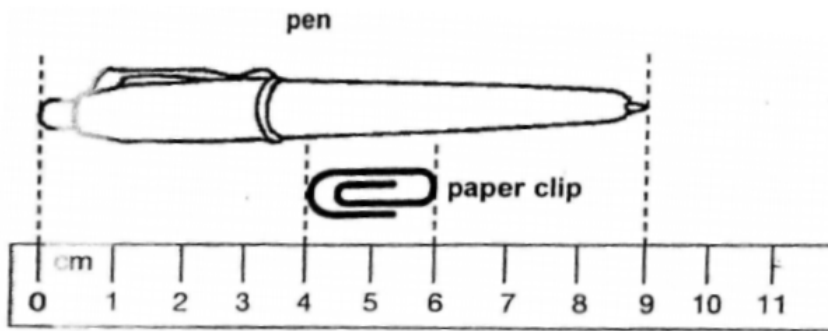
[Remove From Test](#)

## Question 13

Primary 2 Math » Primary 2 Math (Term 2)

2 pts

Study the picture below carefully.



The length of the pen is \_\_\_\_\_.

**Accepted answers:**

- ✓ 9 cm
- ✓ 9cm
- ✓ 9

**Question Type:** Free Text  
**Date Added:** Wed 16th Jan 2019  
**Last Modified:** N/A  
**QID#:** 15,964,985

[Answers](#) | 
 [Edit](#) | 
 [Duplicate](#) | 
 [Used In](#) | 
 [Reorder](#)

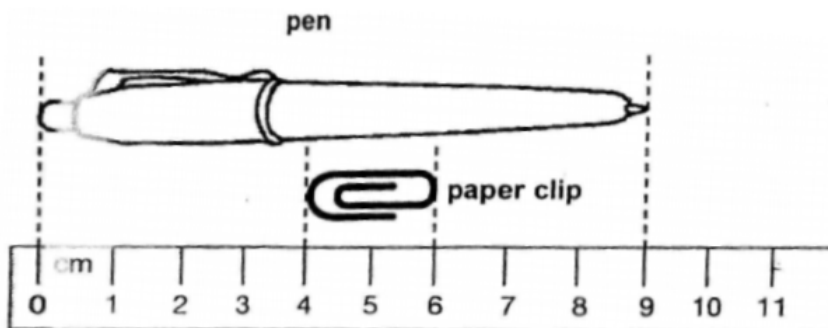
[Remove From Test](#)

## Question 14

Primary 2 Math » Primary 2 Math (Term 2)

2 pts

Study the picture below carefully.



The paperclip is \_\_\_\_\_ shorter than the pen.

**Accepted answers:**

- ✓ 7 cm
- ✓ 7cm

✓ 7

---

**Question Type:** Free Text  
**Date Added:** Wed 16th Jan 2019  
**Last Modified:** N/A  
**QID#:** 15,964,999

[Answers](#) | [Edit](#) | [Duplicate](#) | [Used In](#) | [Reorder](#)

[Remove From Test](#)

## Question 15

Primary 2 Math » Primary 2 Math (Term 2)

2 pts

### SECTION C (3 x 4marks)

There are 3 questions in this section.  
Read the questions carefully.

Ben bought a shirt and a watch.  
The watch costs \$93.  
The shirt cost \$42 less than the watch.

a) How much did the shirt cost?

The shirt cost \$ \_\_\_\_\_.

#### Accepted answers:

✓ 51

✓ \$51

✓ \$ 51

---

**Question Type:** Free Text  
**Date Added:** Wed 16th Jan 2019  
**Last Modified:** N/A  
**QID#:** 15,965,642

[Answers](#) | [Edit](#) | [Duplicate](#) | [Used In](#) | [Reorder](#)

[Remove From Test](#)

## Question 16

Primary 2 Math » Primary 2 Math (Term 2)

2 pts

Ben bought a shirt and a watch.  
The watch costs \$93.  
The shirt cost \$42 less than the watch.

b) How much did he spend altogether?

Ben spent \$ \_\_\_\_\_ altogether.

#### Accepted answers:

✓ 144

✓ \$144

✓ \$ 144

---

**Question Type:** Free Text  
**Date Added:** Wed 16th Jan 2019



Last Modified: N/A  
QID#: 15,965,658

[Answers](#) | [Edit](#) | [Duplicate](#) | [Used In](#) | [Reorder](#)

[Remove From Test](#)

## Question 17

Primary 2 Math » Primary 2 Math (Term 2)

2 pts

There are 320 children.  
146 are boys and the rest are girls.

a) How many girls are there?

There are \_\_\_\_\_ girls.

**Accepted answers:**

✓ 174

**Question Type:** Free Text  
**Date Added:** Wed 16th Jan 2019  
**Last Modified:** N/A  
**QID#:** 15,965,674

[Answers](#) | [Edit](#) | [Duplicate](#) | [Used In](#) | [Reorder](#)

[Remove From Test](#)

## Question 18

Primary 2 Math » Primary 2 Math (Term 2)

2 pts

There are 320 children.  
146 are boys and the rest are girls.

b) How many more girls than boys are there?

There are \_\_\_\_\_ more girls than boys.

**Accepted answers:**

✓ 28

**Question Type:** Free Text  
**Date Added:** Wed 16th Jan 2019  
**Last Modified:** N/A  
**QID#:** 15,965,684

[Answers](#) | [Edit](#) | [Duplicate](#) | [Used In](#) | [Reorder](#)

[Remove From Test](#)

## Question 19

Primary 2 Math » Primary 2 Math (Term 2)

2 pts

Sam has 10 boxes of toys.  
There are 4 toys in each box.

a) How many toys are there altogether?

There are \_\_\_\_\_ toys.

**Accepted answers:**

✓ 40

---

**Question Type:** Free Text  
**Date Added:** Wed 16th Jan 2019  
**Last Modified:** N/A  
**QID#:** 15,965,700

[Answers](#) | [Edit](#) | [Duplicate](#) | [Used In](#) | [Reorder](#)

[Remove From Test](#)

## Question 20

Primary 2 Math » Primary 2 Math (Term 2)

2 pts

Sam has 10 boxes of toys.  
There are 4 toys in each box.

b) He packs all the toys into bags of 5. How many bags of toys are there?

There are \_\_\_\_\_ bags.

**Accepted answers:**

✓ 8

---

**Question Type:** Free Text  
**Date Added:** Wed 16th Jan 2019  
**Last Modified:** N/A  
**QID#:** 15,965,710

[Answers](#) | [Edit](#) | [Duplicate](#) | [Used In](#) | [Reorder](#)

[Remove From Test](#)